
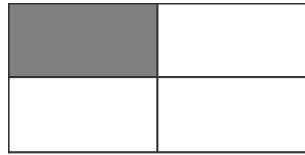


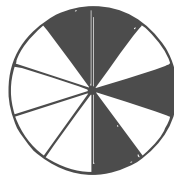
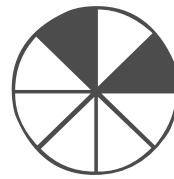



MATHEMATIQUES LES FRACTIONS


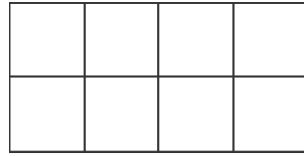

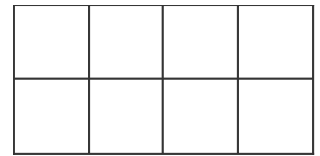
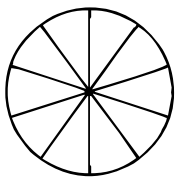
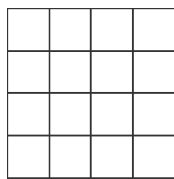


- Lire et représenter une fraction
- Nommer les fractions simples et décimales
- Savoir repérer et placer une fraction sur une droite graduée
- Comparer une fraction à l'unité
- Décomposer une fraction décimale.

1 ECRIS LES FRACTIONS CORRESPONDANTES A LA PARTIE COLOREE.


 $\frac{\quad}{\quad}$

 $\frac{\quad}{\quad}$

 $\frac{\quad}{\quad}$

 $\frac{\quad}{\quad}$

 $\frac{\quad}{\quad}$

 $\frac{\quad}{\quad}$

 $\frac{\quad}{\quad}$

 $\frac{\quad}{\quad}$

2 A TOI DE COLORIER LES FRACTIONS CORRESPONDANTES.


 $\frac{1}{8}$

 $\frac{1}{2}$

 $\frac{3}{4}$

 $\frac{7}{8}$

 $\frac{3}{10}$

 $\frac{2}{8}$

 $\frac{3}{10}$

 $\frac{8}{100}$

3 ECRIS CES FRACTIONS EN CHIFFRES OU EN LETTRES.

 $\frac{3}{10}$ _____

 $\frac{2}{3}$ _____

 $\frac{1}{2}$ _____

 $\frac{\quad}{\quad}$ Vingt-cinq centièmes

 $\frac{\quad}{\quad}$ Cinq quarts

 $\frac{\quad}{\quad}$ Quatre douzièmes

